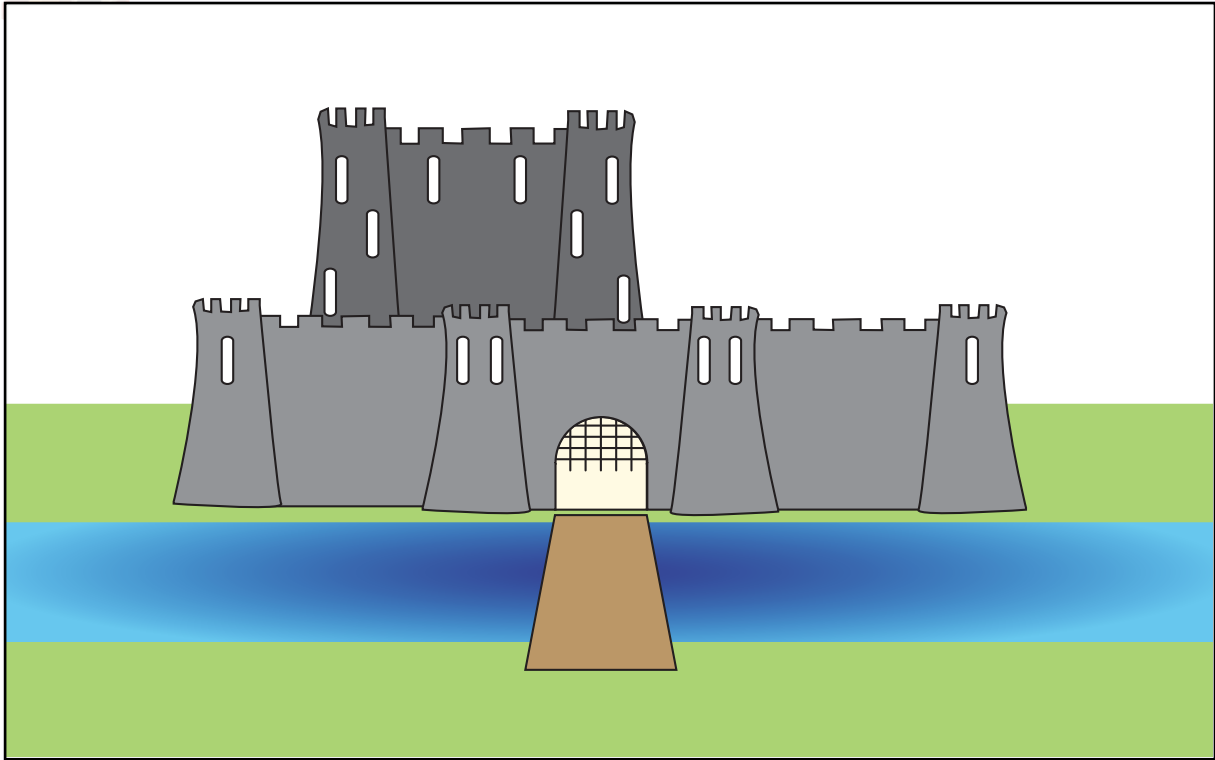


Name: _____ Date: _____



Label the picture of the castle using the word bank to help. Then choose two sections of the castle and say why they were important.



Four horizontal lines for writing.

Four horizontal lines for writing.

Name: _____ Date: _____




Draw and label a picture of a castle. You can use the word bank to help. Then explain why three sections of the castle were important.

A large, empty rectangular box with a black border, intended for the student to draw a picture of a castle.A rounded rectangular box containing three horizontal lines for writing the student's explanation.A rounded rectangular box containing three horizontal lines for writing the student's explanation.A rounded rectangular box containing three horizontal lines for writing the student's explanation.


Name: _____ Date: _____



Label this picture of a castle. Then write description of each section of the castle next to its label. You can use the word bank to help.




Name: _____ Date: _____



Can you name and match the purpose to each section of a medieval castle?



Empty rounded rectangular box for labeling the first image.



Empty rounded rectangular box for labeling the second image.




Empty rounded rectangular box for labeling the third image.



Empty rounded rectangular box for labeling the fourth image.


Name: _____ Date: _____



Can you name and write the purpose to each section of a medieval castle?



Blank rounded rectangular box for writing the name and purpose of the castle tower.



Blank rounded rectangular box for writing the name and purpose of the castle moat.



Blank rounded rectangular box for writing the name and purpose of the castle wall.



Blank rounded rectangular box for writing the name and purpose of the castle entrance.

This was the safest place to be if the castle was attacked. It was taller than the walls so it made a good lookout post.

It is the _____.

Most castles had one of these. It helped to make the castle easier to defend because it made it harder for attackers to reach the castle walls.

It is the _____.

Lots of castles had two of these, an inner and an outer one. They were 5 metres thick and had gaps at the top to shoot arrows through. There were towers along them.

They are _____.

This was the main way into the castle. It would have always had a soldier guarding it. There would have been a drawbridge and a portcullis to stop the enemy from getting to it.


It is the _____.



keep



motte



moat



wall




tower



battlements



gatehouse



portcullis



drawbridge



keep



motte



moat



wall




tower




battlements



gatehouse




portcullis



drawbridge

Name: _____ Date: _____




Can you name and match the purpose to each section of a medieval castle?



This was the safest place to be if the castle was attacked. It was taller than the walls so it made a good lookout post.

It is the keep.



Most castles had one of these. It helped to make the castle easier to defend because it made it harder for attackers to reach the castle walls.

It is the moat.



Lots of castles had two of these, an inner and an outer one. They were 5 metres thick and had gaps at the top to shoot arrows through. There were towers along them.

They are walls.



This was the main way into the castle. It would have always had a soldier guarding it. There would have been a drawbridge and a portcullis to stop the enemy from getting to it.

It is the gatehouse.