



# Spring Maths Revision

## Activity Booklet



# Collect the Daffodils

Help the shop keeper by putting these numbered daffodils in the correct order, from smallest to largest number.



Now put these in order from **largest** to **smallest**.



\_\_\_\_\_



\_\_\_\_\_



\_\_\_\_\_



\_\_\_\_\_



\_\_\_\_\_



\_\_\_\_\_



\_\_\_\_\_



\_\_\_\_\_



\_\_\_\_\_



\_\_\_\_\_



\_\_\_\_\_



\_\_\_\_\_



\_\_\_\_\_



\_\_\_\_\_



\_\_\_\_\_



\_\_\_\_\_



\_\_\_\_\_



\_\_\_\_\_

# Match the Carrots to the Bunnies

You can draw lines to match each carrot to its bunny, or colour the matching carrot and bunny in the same colour.

43

no ones

96

5 tens

2 ones

3 ones

78

21

30

5 ones

9 tens

44

8 ones

75

2 tens

57

32

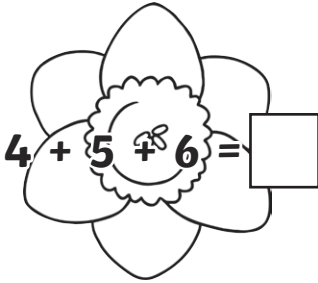
2

same number of tens as ones


no tens

# Spring Addition and Subtraction


Find the answers to these calculations and write them in the flowers.




$4 + 5 + 6 = \square$




$8 + 7 = \square$



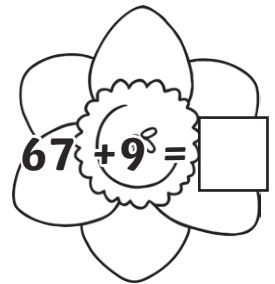
$34 + 42 = \square$



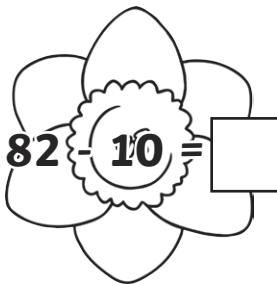
$51 + 23 = \square$




$45 + 10 = \square$




$67 + 9 = \square$



$82 - 10 = \square$



$93 - 22 = \square$

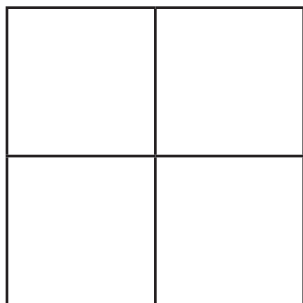


$92 - 18 = \square$

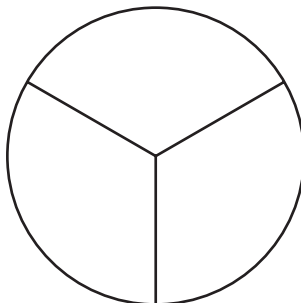
Now look at your answers. If the answer has **7 tens**, colour the flower yellow. If the answer has **5 ones**, colour the flower blue.

# Fractions


Use your favourite spring colours to shade in these shapes.



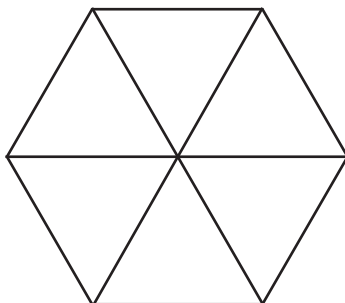
Shade  $\frac{1}{4}$



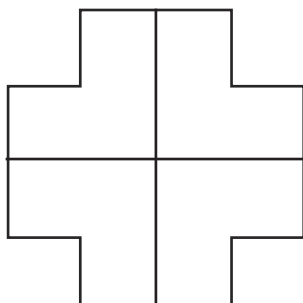
Shade  $\frac{1}{3}$



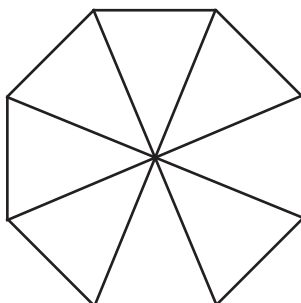
Shade  $\frac{1}{2}$



Shade  $\frac{1}{2}$







Shade  $\frac{2}{4}$



Shade  $\frac{3}{4}$


# Flower Fractions

Find the fractions of these Spring flowers.

	Find $\frac{1}{2}$
	Find $\frac{1}{4}$
	Find $\frac{1}{3}$
	Find $\frac{3}{4}$

# How Big Is the chick?

Use a ruler to measure these chicks.



Now complete these statements using  $<$ ,  $>$  or  $=$

chick A  chick B





chick B  chick C

chick A + chick B  chick D



# Marvellous Milkshakes

Here are the prices of some different milkshake flavours in the shops. Draw two different combinations of coins you could use to pay for each one.

 <p><b>Toffee Surprise</b> 28p</p>	 <p><b>Marvellous Mashmallow</b> 35p</p>	 <p><b>Choco Chip</b> 41p</p>	 <p><b>Nutty Delight</b> 66p</p>
--	---	--	--

Toffee Surprise

Marvellous Marshmallow

Choco Chip

Nutty Delight



# How Many Jelly Beans?

Jack buys a packet of coloured jelly beans. He empties them into a bowl and counts the different colours. He starts to make a tally chart. Complete Jack's tally chart.

Colours	Tally	Number
Yellow		3
Pink		
Purple		
Orange		
Brown		6
Green		1

1. How many pink jelly beans were there?


2. How many more purple jelly beans than green jelly beans were there?

3. Which colour had the most jelly beans?


4. How many jelly beans were in the packet altogether?

# Spring Time


Draw hands on these clocks to show the correct times.




6 o'clock




quarter past 8




twenty past 7




5 to 3




half past 1




quarter to 9



10 past 10



25 to 5



12 o'clock

# Spring Shapes

Ava wants to decorate her Spring card with 2D shapes. She describes the shapes she wants and asks her friend to find them for her. Which shapes is she describing?

This shape has  
3 sides and  
3 corners.

This shape  
has five sides  
and five corners.

This shape has  
two long sides and  
two short sides.

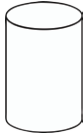
This shape has  
one curved side  
and no corners.

# Flower Boxes

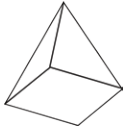
Abbie decided to make different-shaped boxes to put her spring flowers in this year. She describes which box she is giving to each of her friends and family. Write the name of the shape next to each person.



sphere



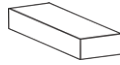
cylinder



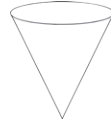
square-based  
pyramid



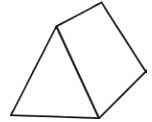
cube



cuboid



cone



triangular  
prism

<b>Mum</b>	"Mum's box will have two faces and one point. One of the faces is a circle."	
<b>Dad</b>	"Dad's box will have six square faces and 8 vertices."	
<b>Grandad</b>	"Grandad's box will have no edges and no vertices."	
<b>Little brother</b>	"My little brother's box will have 5 faces. 3 of the faces are rectangles and two are triangles."	
<b>Best friend</b>	"My best friend's box will have three faces and no vertices."	

# Spring Puzzles

1. James has 20 daffodils. He gives 11 of them away.  
How many does he have left?

2. Sam picks some flowers. He gives half of them to his mum.  
He has 8 flowers left. How many flowers did he pick?

3. A shop sells these Spring treats:



**Daffodils**

2p



**Spring cake**

5p



**Milkshake**

10p

Maisie spends exactly 20p on treats.

Tick the selection of treats that she buys.




# Spring Puzzles

1. Max is packing up cakes for the Spring fair. He puts two cakes in each bag. How many cakes are there altogether?



2. Mo is decorating cakes for the fair. He wants to put 3 chocolate buttons on each cake. How many buttons will he need?



3. Mina plants some carrots for her rabbit. She plants 5 rows with 4 carrots in each. When the carrots have grown, she pulls up 3 to give to her rabbit. How many carrots are left?

4. Joe wants to give some flowers to his mum, his gran and his aunt. He wants to give them 5 flowers each. Tick two number sentences he could use to work out how many flowers he needs altogether.

$3 \times 5$

$5 + 5 + 5$

$3 + 3 + 3$

$5 \times 5$

