


Easter Maths Revision

Activity Booklet




twinkl

Collect the Eggs

Help the Easter Bunny by putting these numbered eggs in the correct order, from smallest to largest number.



Now put these in order from **largest** to **smallest**.



Match the Eggs to the Easter Bunnies

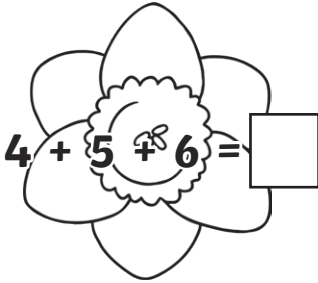
You can draw lines to match each egg to its bunny, or colour the matching eggs and bunnies in the same colour.

The image contains 15 eggs and 15 bunnies. Each egg has a number written inside, and each bunny has a description of its number's place value written on its side.


Egg Number	Bunny Description
43	no ones
96	5 tens
2 ones	3 ones
78	21
30	5 ones
9 tens	8 ones
44	75
2 tens	57
2	32
same number of tens as ones	no tens

Easter Addition and Subtraction


Find the answers to these calculations and write them in the flowers.




$4 + 5 + 6 = \square$




$8 + 7 = \square$



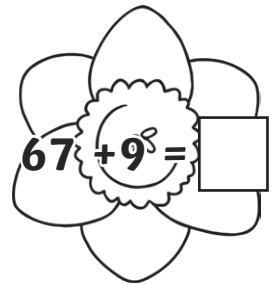
$34 + 42 = \square$



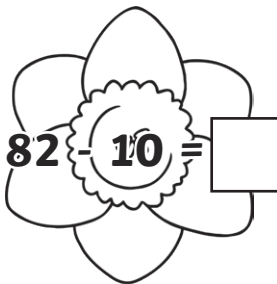
$51 + 23 = \square$




$45 + 10 = \square$



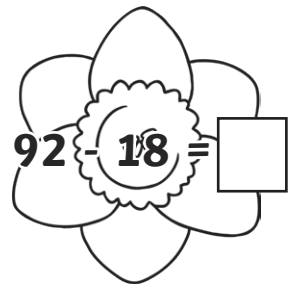
$67 + 9 = \square$



$82 - 10 = \square$



$93 - 22 = \square$

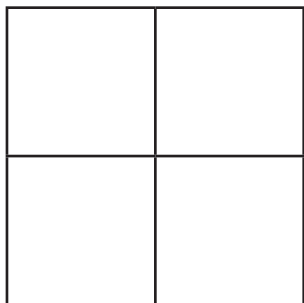


$92 - 18 = \square$

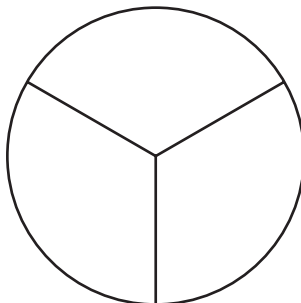
Now look at your answers. If the answer has **7 tens**, colour the flower yellow. If the answer has **5 ones**, colour the flower blue.

Fractions


Use your favourite spring colours to shade in these shapes.



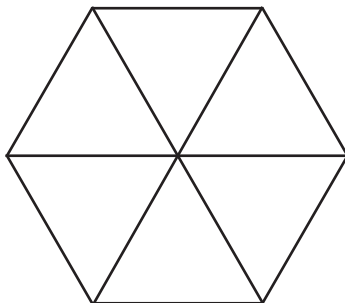
Shade $\frac{1}{4}$



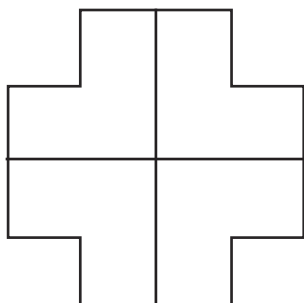
Shade $\frac{1}{3}$



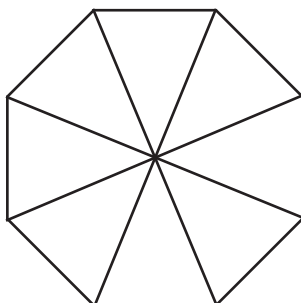
Shade $\frac{1}{2}$



Shade $\frac{1}{2}$




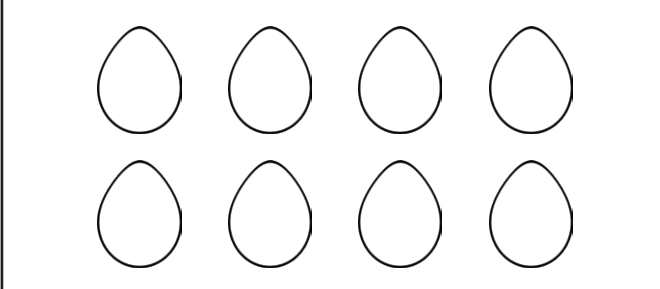


Shade $\frac{2}{4}$



Shade $\frac{3}{4}$

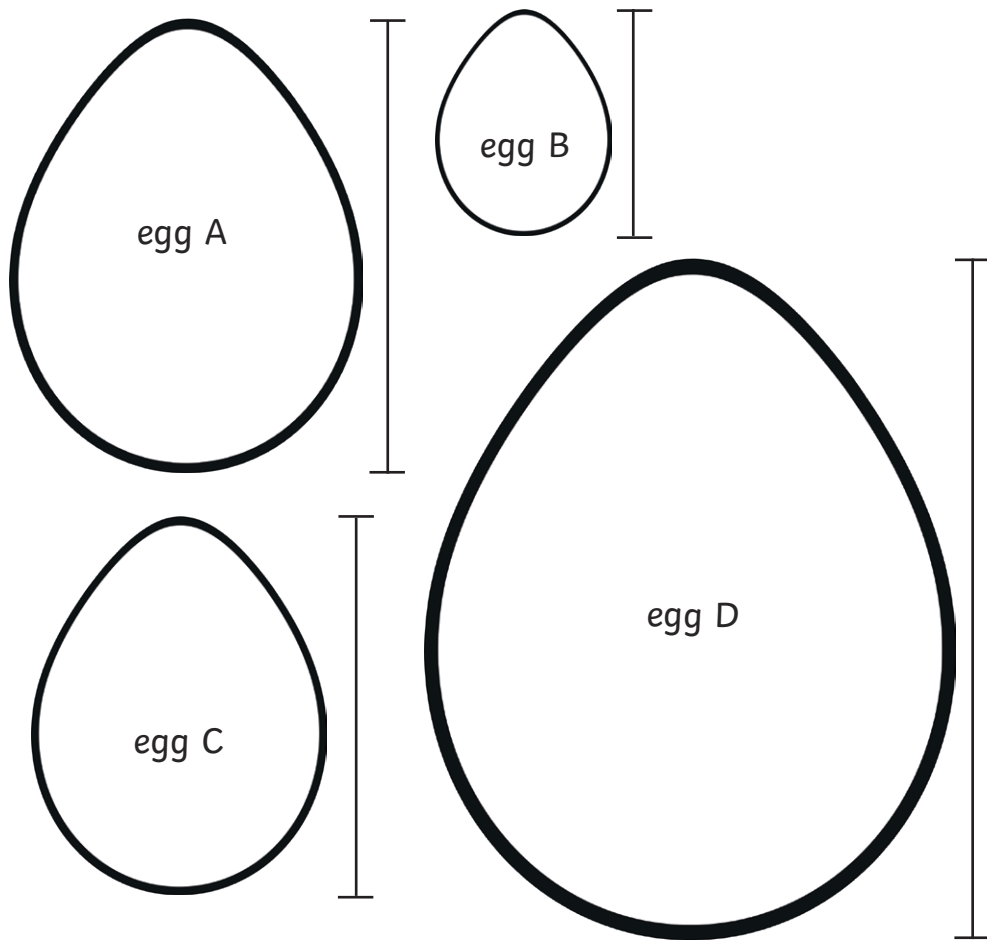
Egg Fractions

Find the fractions of these Easter eggs.

	Find $\frac{1}{2}$
	Find $\frac{1}{4}$
	Find $\frac{1}{3}$
	Find $\frac{3}{4}$

How Big Is the Egg?

Use a ruler to measure these eggs.



Now complete these statements using $<$, $>$ or $=$



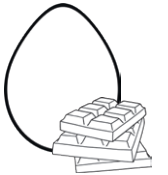
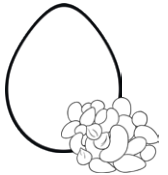
egg A egg B

egg B egg C

egg A + egg B egg D

Buying Eggs

Here are the prices of some different Easter eggs in the shops. Draw two different combinations of coins you could use to pay for each one.

 Toffee Surprise 28p	 Marvellous Mashmallow 35p	 Choco Chip 41p	 Nutty Delight 66p
--	--	---	---

Toffee Surprise

Marvellous Marshmallow

Choco Chip

Nutty Delight

How Many Eggs?

Jack buys a packet of coloured mini eggs. He empties them into a bowl and counts the different colours. He starts to make a tally chart. Complete Jack's tally chart.

Colours	Tally	Number
Yellow		3
Pink		
Purple		
Orange		
Brown		6
Green		1

1. How many pink eggs were there?


2. How many more purple eggs than green eggs were there?

3. Which colour had the most eggs?


4. How many eggs were in the packet altogether?

Easter Time


Draw hands on these clocks to show the correct times.




6 o'clock




quarter past 8




twenty past 7




5 to 3



half past 1




quarter to 9



10 past 10



25 to 5



12 o'clock

Easter Shapes

Ava wants to decorate her Easter card with 2D shapes. She describes the shapes she wants and asks her friend to find them for her. Which shapes is she describing?

This shape has
3 sides and
3 corners.

This shape
has five sides
and five corners.

This shape has
two long sides and
two short sides.


This shape has
one curved side
and no corners.

Easter Boxes

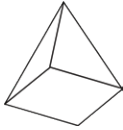
Abbie's Easter eggs have come in lots of different-shaped boxes this year. She describes which egg she is giving to each of her friends and family. Write the name of the shape next to each person.



sphere



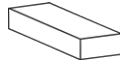
cylinder



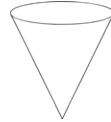
square-based
pyramid



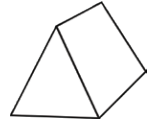
cube



cuboid



cone



triangular
prism


Mum	"Mum's egg will be in a box with one curved surface and one flat surface. The flat surface is a circle."	
Dad	"Dad's egg will be in a box with six square faces and 8 vertices."	
Grandad	"Grandad's egg will be in a box with no edges and no vertices."	
Little brother	"My little brother's egg will be in a box with 5 faces. 3 of the faces are rectangles and two are triangles."	
Best friend	"My best friend's egg will be in a box with 2 flat surfaces, one curved surface and no vertices"	

Easter Bunny Puzzles

1. James has 20 chocolate eggs. He eats 11 of them.
How many does he have left?

2. Sam picks some flowers. He gives half of them to his mum.
He has 8 flowers left. How many flowers did he pick?

3. A shop sells these Easter treats:



Easter egg
2p



Easter cake
5p



chocolate bunny
10p

Maisie spends exactly 20p on treats.

Tick the selection of treats that she buys.




Easter Bunny Puzzles

1. Max is packing up cakes for the Easter fair. He puts two cakes in each bag. How many cakes are there altogether?



2. Mo is decorating cakes for the fair. He wants to put 3 chocolate buttons on each cake. How many buttons will he need?



3. Mina plants some carrots for her rabbit. She plants 5 rows with 4 carrots in each. When the carrots have grown, she pulls up 3 to give to her rabbit. How many carrots are left?

4. Joe wants to give some flowers to his mum, his gran and his aunt. He wants to give them 5 flowers each. Tick two number sentences he could use to work out how many flowers he needs altogether.

3×5

$5 + 5 + 5$

$3 + 3 + 3$

5×5

